



Table Top Rally edition 6: Another 'oop north

The Start/Finish is at OS108: 535135 (PH in the 'V' of brown and yellow roads)
Coloured roads only. A white road is referred to once (Section 2) to clarify instructions.
The road from 466109 to 472117 is a 'Black Spot' and should not be used

Section 1: *Off we go*

.67 el +  + .27 Under ETL Cross M6 twice

Under ETL  Under ETL twice .24  .12 cc

To PH at S506163NNW



Section2: *Compass Rose*

Ignoring 'yellows' that are obviously 'No-Through Roads'.....leave successive junctions in the following directions:-

NNE NW SSE WNW NNW NNE NNE NW SSE WNW

To 442185 (Junction with 'white' road)

Section 3: *Churches and other things*

+ + .5 .11  + .14 Visitor Centre or 

Use only 100m of A59  .13  +  +  .49


To cross bridge at NE476125

Section 4: *Overs and Unders!*

Approach and leave a Level Crossing without using it F u Over a railway



.12 Over a railway via a Level Crossing next to a telephone and a station

Over a canal next to a pub + Over a canal next to a different pub +

Under a railway Pass two locks on a canal  Over a canal by a pub again

Approach and leave a Level Crossing without using it

Over a railway via Level Crossings twice before going under a canal

Post Office + Pass  on your right Pass  on your left

Viewpoint 180° Over a lake .127 

To Parking at 503½123

Section 5: *Right Turns*

Turn right at junctions in the following grid squares. Other junctions are also used.

4913 5014 (at.36) 3x in 5015 2x in 5114

To Finish at PH 535135 Well done!

Route by Clerk of the Course Martin Jelley

Question Sheet

To prove you've plotted the correct route answer the following questions:-

Section 1: *Off we go*

1. What directions do you head in as you pass the first church?
2. What is the first farm you pass after .24
3. How many junctions do you go through in the last kilometre of this section?

Section 2: *Compass Rose*

4. How many green dots do you go through before you cross the railway?
5. You only pass three spot heights in this section. What are they?
6. Apart from the River Yarrow (twice) what other river do you cross?

Section 3: *Churches and other things*

7. What direction are you heading in when you pass the first telephone?
8. What direction are you heading in when you pass the second telephone?
9. What direction are you heading in when you pass the second church with spire (in Mawdesley)?
10. What is the name of the village (7,5) which has the third telephone in?

Section 4: *Overs and Unders*

11. What is the name of the first bridge you use over the canal?
12. Your route follows an on-road cycle route for almost 2km. What no. is the route?
13. Which two word (5,4) hamlet should be 'outlawed'?

Section 5: *Right Turns*

14. In this section you pass three spot heights. What is their total value?
15. Your route takes you about 500m from a windmill. On which hill is this?
16. You have passed many churches on route. What two word village (12,3) are you approaching when you pass the final +?